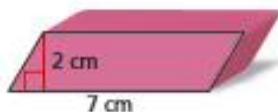


4.1–4.2 Quiz

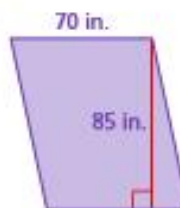
Check It Out
Progress Check
BigIdeasMath.com

Find the area of the parallelogram. (Section 4.1)

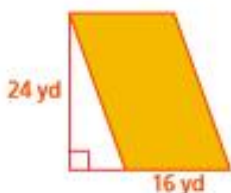
1.



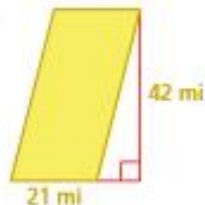
2.



3.

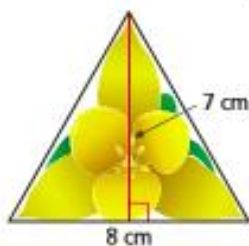


4.

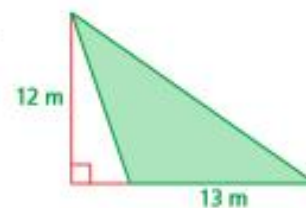


Find the area of the triangle. (Section 4.2)

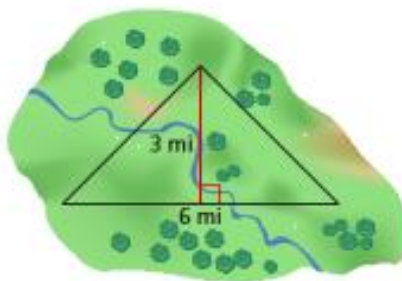
5.



6.



7. **LAND** A wildlife conservation group buys a plot of land. How much land does it buy? (Section 4.2)



8. **FRAMING** A sheet of plywood is 4 feet wide by 8 feet long. What is the minimum number of sheets of plywood needed to cover the frame? Justify your answer. (Section 4.2)

